

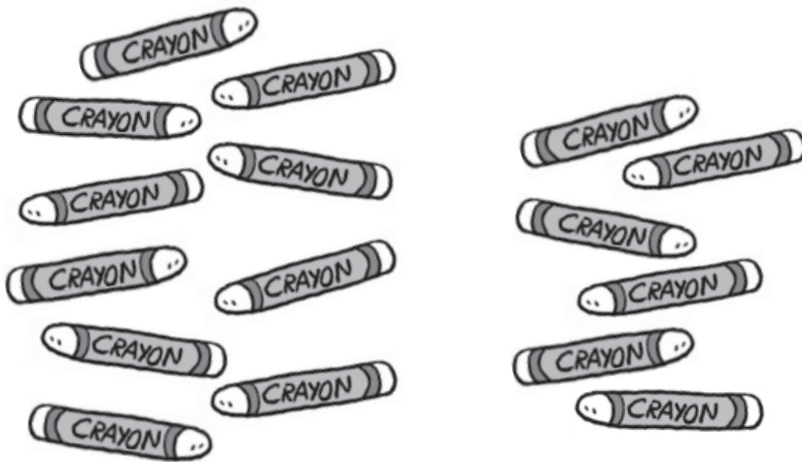
Name: _____

Date: _____

CHAPTER
7

Numbers to 20



1. Make a ten.
Then count on.



$$\boxed{} + \boxed{} = \boxed{}$$

_____ and _____ make 16.



2. Show 13.


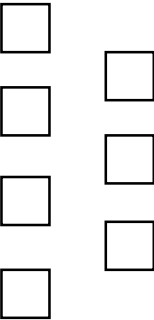
Draw  for tens and  for ones.

Tens	Ones

13 = _____ ten _____ ones

3. Which number is less?

Tens	Ones
	

Tens	Ones
	

_____ is less than _____.

How many less? _____ less

Tell how you know.

4. Corrine and her friends took part in a muffin-baking contest.
Who baked the greatest number of muffins?
Read the clues to find out.

Clues:

David baked 10 muffins.

Corrine baked 8 more muffins than David.

Linda baked 1 less muffin than Corrine.

Corrine baked _____ muffins.

Linda baked _____ muffins.

_____ baked the greatest number of muffins.